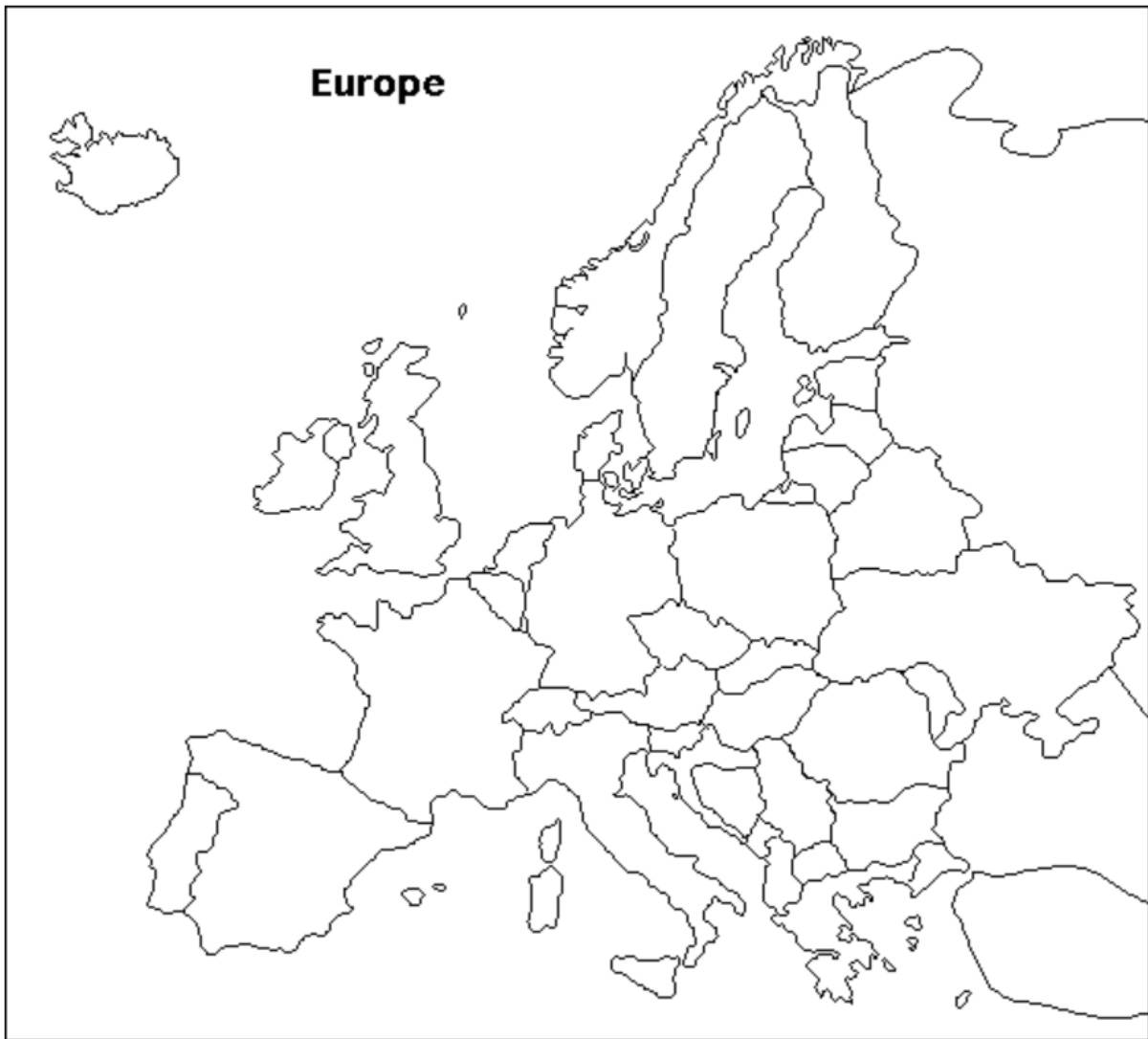


Name: \_\_\_\_\_




**Which of these countries form the European Union?**

- Circle the country from the list below \* Color the country on the map \* Label the country


Belarus	Russia	Ireland	Andorra	Montenegro
Bulgaria	Slovakia	Latvia	Croatia	Portugal
Czech Republic	Ukraine	Lithuania	Cyprus	San Marino
Hungary	Finland	Norway	Greece	Serbia
Moldova	Denmark	Sweden	Italy	Slovenia
Poland	Estonia	United Kingdom	Macedonia	Spain
Romania	Iceland	Albania	Malta	Austria
Belgium	France	Germany	Lichtenstein	Luxembourg
Monaco	Netherlands	Switzerland	Bosnia & Herzogovina	Sicily

## EUROPEAN UNION WORKSHEET (pg2)

1. Find and draw the flags of Hungary and Slovakia.



2. Now draw the flag of the European Union



3. True or False:

All European Union member states are in Europe.	
All European Union states use only the Euro.	
Common rules and laws regulate the whole European Union.	
The European Economic Community is the 'father' of the EU.	
A country with a totalitarian government can join the EU.	